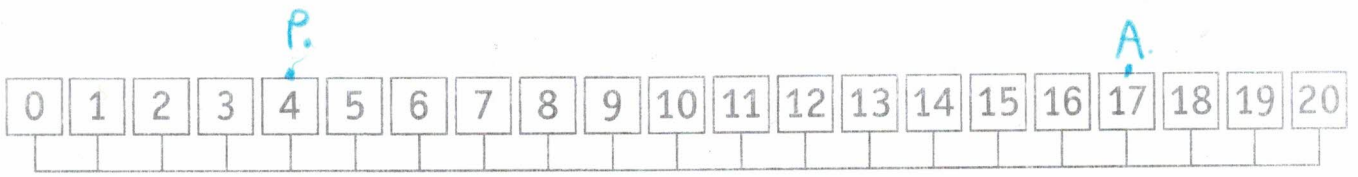
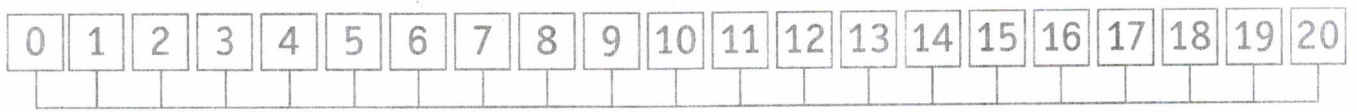


1 ESEGUI LE ADDIZIONI SULLA LINEA DEI NUMERI.


SUL
QUAD.



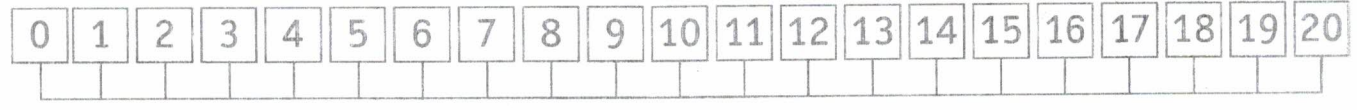
$$4 + 13 = \underline{\quad}$$



$$9 + 11 = \underline{\quad}$$



$$6 + 10 = \underline{\quad}$$



$$3 + 16 = \underline{\quad}$$

1 ESEGUI LE SOTTRAZIONI SULLA LINEA DEI NUMERI.
SEGUI L'ESEMPIO.

SUL
QUADERNO

